



**GOOD LEARNING**


20<sup>th</sup> January 2017

12/10/17 Dear Dr Frankenstein,

I am writing to you to inform you that you haven't gave your own creation his own rights.

To begin with one of his rights state he has to be cared for and have a home ~~with~~. First of all, he has not been cared for because when he was getting beaten you were not there to care for him. Also while you were in a nice warm bed and had shelter, your creation was out in the cold and darkness not ~~to~~ ~~to~~ knowing where to go.

Great work in making your point and backing it up with evidence.





11/17 ...

In Sunday Jane saw 15 red and green cars altogether. She saw 22 of them in the afternoon. How many of them did she see in the morning?

What if...  
...you see a tally chart you have created or make up one of your own?

**CARD 14**


Ann made a tally chart to represent the cars she saw in the morning while completing a traffic survey in Geography. How many red and green cars did she see in total?

Ann made a tally chart to represent the cars she saw in the morning while completing a traffic survey in Geography. In the afternoon she saw 22 more red cars and 2 more green cars. How many red and green cars did she see altogether that day?

Ann made a tally chart to represent the cars she saw in the morning while completing a traffic survey in Geography. In the afternoon she saw 22 more red cars and 2 more green cars. How many red and green cars did she see altogether that day?

Cars seen in the morning	
Red	11
Green	4
Blue	2
Yellow	1

Joe saw 16 red and blue cars on Saturday and 22 red and blue cars on Sunday. He said he saw 40 cars in total over the weekend. Is he correct? Explain how you know.



11 + 2 = 13

challenge

$11 + 20 = 31$  worked

$2 + 2 = 4$  using

how many cars altogether?

$4 + 1 = 5$  brain

my brain

Honey (8/1/17)

Honey could answer the questions by using the tally chart and Maths knowledge by adding to find the total. I prompted to write explanation.

① where did you get 11 + 2 = 13 from? from the tally chart

✓view Lilly: What a super effort you have made. I am so proud of your determination.



My Name is Hapi. I am a canopic jar. As I watched, people got the dead body ready to become a mummy.

First they ~~wash~~ the body with palm oil and water from the ~~river~~ Nile. ✓

Then they ~~would~~ get a ~~hook~~ <sup>hook</sup> and pull the brain ~~with~~ <sup>out</sup> your nose. ✓

Next they ~~cut~~ <sup>took</sup> body organs ~~except~~ <sup>except</sup> the heart. Put the liver, lungs and intestines and ~~put~~ <sup>put</sup> them in canopic jars. ✓

After that I ~~saw~~ <sup>saw</sup> ~~lots~~ <sup>lots</sup> being put on the body.

I saw people ~~wrap~~ <sup>wrap</sup> the body in linen fabric adding amulets and a book of death. Finally, place the mummy in the ~~the~~ <sup>the</sup> sarcophagus and move in the pyramid. ✓



Watt' Compare fractions

①  $\frac{3}{4}, \frac{1}{2}, \frac{4}{6}$

$\frac{3}{4} \times 3 = \frac{9}{12}$ 
 $\frac{1}{2} \times 6 = \frac{6}{12}$ 
 $\frac{4}{6} \times 2 = \frac{8}{12}$

$\frac{1}{2} < \frac{3}{4} < \frac{4}{6}$

$\frac{1}{2} \rightarrow \frac{3}{4} \rightarrow \frac{4}{6}$

the order of the fractions goes to biggest to smallest so this is the order  $\frac{6}{12}, \frac{9}{12}, \frac{8}{12}, \frac{4}{6}, \frac{3}{4}, \frac{1}{2}$  because  $\frac{12}{12}$  is the biggest because you only have 3 more pieces to eat then  $\frac{9}{12}$  because you have to eat 4 more pieces than 6 because you have to eat 12 and 8 is less than 9.



②  $\frac{6}{8}, \frac{3}{4}, \frac{1}{2}$

$\frac{1}{2} \times 4 = \frac{4}{8}$ 
 $\frac{3}{4} \times 2 = \frac{6}{8}$ 
 $\frac{6}{8} \times 1 = \frac{6}{8}$

$\frac{6}{8}$  is bigger because you have to eat 2 pieces and  $\frac{3}{4}$  and  $\frac{1}{2}$  is bigger than  $\frac{4}{8}$  because you have to eat 4 pieces more but you have to eat a whole.



Good work Chaya I can see you have tried to explain







Wednesday 16<sup>th</sup> January

Teal Dad can see what link ideas and use interesting vocabulary

Quick starter:

- 1) Falcon
- 2) School big-ben
- 3) I could see the roads and rivers flowing under me.

Success Criteria:

- Expanded noun phrases to describe ✓
- Added emotions ✓
- One idea per paragraph ✓

The falcon flew high as I gripped onto the neck of it. I hoped I was going to Ka. As I flew higher, the areas on top of the flats were in reach. I flew up. Luckily, I missed it. By now we were heading over school. Was I going to fall? I was terrified, petrified even. I wished I would be with Ka. I thought about it more maybe I would be going to Egypt. Ancient Egypt. Maybe just maybe I might meet King Tut.

I started to think about dad. I questioned myself. Would he be worried? I didn't know. I didn't care. This is a once in a life time adventure. I love adventures. I had a shiver as the rain drops fell. All I could wish for was Ka. I could picture her. Her fluffy fur that tickled my face. Her wiggly tail that made me laugh. Even her pink nose that was very moisture.

I could see my face reflecting of the river. The falcon scraped its claws across the surface of wet damp lake. It sprayed my face.

Not long after, we were flying high again I could see Big Ben. I heard the chime of the clock. It was really loud I wasn't able to think of words to describe it. We went right over the tip of the loud clock. Was this a dream? because for starters I think then I'm on a falcons back and now I'm describing it. Whatever I kept thinking about in the back of my mind it was Ka I was thinking about. I missed her, I started to miss her more and more. Although I was really worried about Ka, there was nothing stopping me from missing dad.

Dad had been there for me on the ups and the downs and here I am riding on an eagles back to find Ka. Ka left me twice and I can still forgive her. Why do I keep giving her chance after chance? why do I keep giving her my heart.



Simply superb work, with a whole range of amazing emotional details.




11.1.2017





Michael

Michael



Yesterday I went

to Birmingham

with my

family

to see

Well done  
Michael you have  
worked like Kit Young  
and used your phonics  
Jo



Michael  
the fastest  
car



we went  
to go  
on  
the  
road

and see who's  
the fastest

the  
got changed



we went  
on the  
bus and  
it was  
so nice



Thursday 5<sup>th</sup> January 2016

**WALT: Scan and retrieve information from a text**

- 1) By 1900, which king still hadn't been found in the valley of the kings? By 1900, Tutankhamen is still  
hadn't been found in the valley of  
kings. ✓
- 2) What did most Archaeologists believe about Tutankhamen's tomb? Most Archaeologists believed  
that the treasure in Tutankhamen's tomb  
would have been stolen many years  
before. ✓
- 3) Why did people search for the buried tombs of the ancient Egyptians? Because they hoped to find  
beautiful treasure, like the mummy  
case that held Tutankhamen's  
body. ✓
- 4) Who was Howard Carter and what was he famous for? Howard Carter was an archaeologist  
who helped to excavate the valley  
of the kings from 1899 to 1905. ✓
- 5) Why was Lord Carnarvon very important to Howard Carter? Without Lord Carnarvon  
there would be no excavation,  
so Lord Carnarvon payed all  
of it. ✓

